









# Planning a journey

## Using a bus map

### Answer Sheet

Understanding how to use a bus map will help you to make your journey more easily. Look at the map carefully and answer the following.

Label what each of these symbols mean on a bus map:

	<b>N1</b>				<b>Cutty Sark</b>
Connection with DLR	Night buses	Connection with the tube	Connection with National Rail	Connection with the Tram	Red names indicate places of interest
	<b>211</b>	<b>§</b>			
Mon-Fri 1008-1528 only	Daytime routes in black	Mon-Fri Morning peak hours	Mon-Fri Afternoon peak hours	Connection with boat services	Route 4 only runs Mon-Sat 1/10 /05

During the day which two bus services could you take to Charing Cross Station? **139 and 176**

Which bus stops do these buses leave from at Waterloo? **J and P**

On what road is bus stop P located? **On Waterloo Bridge**

Use the destination finder and the map to make a list of all the stops that have an interchange station with the Underground?

**Camden Town, Canada Water, Cannon Street, Chalk Farm, Chancery Lane, Charing Cross, Tottenham Court Road, Holborn, Oxford Circus, Bond Street, and Waterloo.**

Which of the bus services listed run at night? **N343, N381, N171 and N1**

What does a yellow panel mean at bus stops?  
**It indicates that you need to buy your tickets before you board**










How many different buses stop at Aldwych? **14**

# Planning a journey

## Using a bus map

Understanding how to use a bus map will help you to make your journey more easily. Look at the map carefully and answer the following.

Label what each of these symbols mean on a bus map:

	<b>N1</b>				<b>Cutty Sark</b>
	<b>211</b>				

During the day which two bus services could you take to Charing Cross Station?

Which bus stops do these buses leave from at Waterloo?

On what road is bus stop P located?

Use the destination finder and the map to make a list of all the stops that have an interchange station with the Underground?

Which of the bus services listed run at night?

What does a yellow panel mean at bus stops?

How many different buses stop at Aldwych?

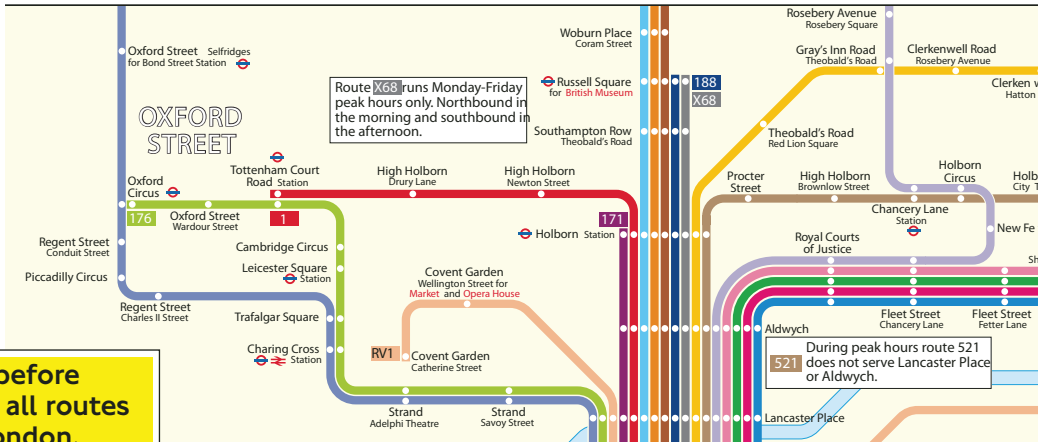
# Planning a journey

Name \_\_\_\_\_

Date \_\_\_\_\_

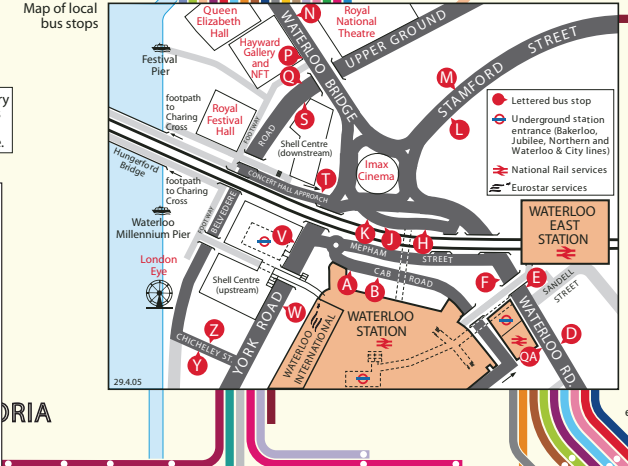
## Using a bus map

 24 hour travel information **020 7222 1234**
 Textphone **020 7918 3015**
 Website **tfl.gov.uk**



**Buy tickets before boarding on all routes in central London. All stops affected are clearly marked with a yellow panel.**

The yellow tinted area includes every bus stop up to two-and-a-half miles from Waterloo Station. Main stops are shown in the white area outside.




### Destination finder

Destination	Bus service	Bus stops
Cambridge Circus	176	J P
Cambridge Heath	26	P OA
Camden Town	168	K P
Canada Water	1, 188, N1	E N
	381, N381	M V
Cannon Street Station	521 Mon-Fri not eves	H P
Catford Bus Garage	171	D N
Catford Lewisham Town Hall	171, N171	D N
Catford and Catford Bridge Stations	171, N171	D N
Chalk Farm	168	K P
Chancery Lane Station	341	F P
	521 Mon-Fri not eves	H P
Charing Cross Station	139, 176	J P
	N343	L P
	N381	L W

#### Key

- 211 Daytime routes in black
- N1 Night Buses in blue.
- Red names indicate place of interest
- Connections with Underground
- Connections with National Rail
- Connections with Docklands Light Railway
- Connections with Tramlink
- Connections with Boat services
- Mon-Fri morning peak hours
- Mon-Fri afternoon peak hours
- Mon-Fri 1008-1528 only
- Route 4 only runs Mondays to Saturdays until 1 October 2005

 Red discs show the bus stop you need for your chosen bus service. The disc ● appears on the top of the bus stop in the street (see map of town centre in centre of diagram).