

# Planning a journey



## Using a tram map

### Answer sheet

Understanding how to use a tram map will help you make your journey more easily. Look carefully at the two maps provided and answer these questions.

**Which Tramlink route runs from Croydon to Beckenham Junction?**

Tramlink Route 2

**Wimbledon is an interchange station. List the places you can travel to on National Rail.**

Clapham Junction, Waterloo, Thameslink to the City, Surbiton, Kingston and the South West.

**Which two Tramlink routes is Elmers End stop on?**

Routes 1 and 2

**Using the road map write the name of the tram stop that is nearest to the following destination:**

- |                              |                          |
|------------------------------|--------------------------|
| 1. Morland Road              | Blackhorse Lane          |
| 2. St Luke's Close           | Woodside                 |
| 3. School off Stockbury Road | Arena                    |
| 4. Library                   | Woodside/Blackhorse lane |
| 5. Shopping area             | Blackhorse Lane          |

**Using the road map write the grid reference for the following destinations:**

- |   |                                      |
|---|--------------------------------------|
| 1. The golf course/centre                 | D1                                   |
| 2. The school south of Woodside tram stop | C4                                   |
| 3. A road serviced by buses               | A3, A4, B1, B2, B4, C2, C3, C4 or D2 |

**Which number bus or buses travel to the following destinations?**

- |                 |            |
|-----------------|------------|
| 1. Beckenham    | 726        |
| 2. East Croydon | 197 or 312 |

# Planning a journey

Name

Date

## Using a tram map

Understanding how to use a tram map will help you make your journey more easily. Look carefully at the two maps provided and answer these questions.

Which Tramlink route runs from Croydon to Beckenham Junction?

.....

Wimbledon is an interchange station. List the places you can travel to on National Rail.

.....

.....

Which two Tramlink routes is Elmers End stop on?

.....

Using the road map write the name of the tram stop that is nearest to the following destination:

- 1. Morland Road .....
- 2. St Luke's Close .....
- 3. School off Stockbury Road .....
- 4. Library .....
- 5. Shopping area .....

Using the road map write the grid reference for the following destinations:

- 1. The golf course/centre .....
- 2. The school south of Woodside tram stop .....
- 3. A road serviced by buses .....

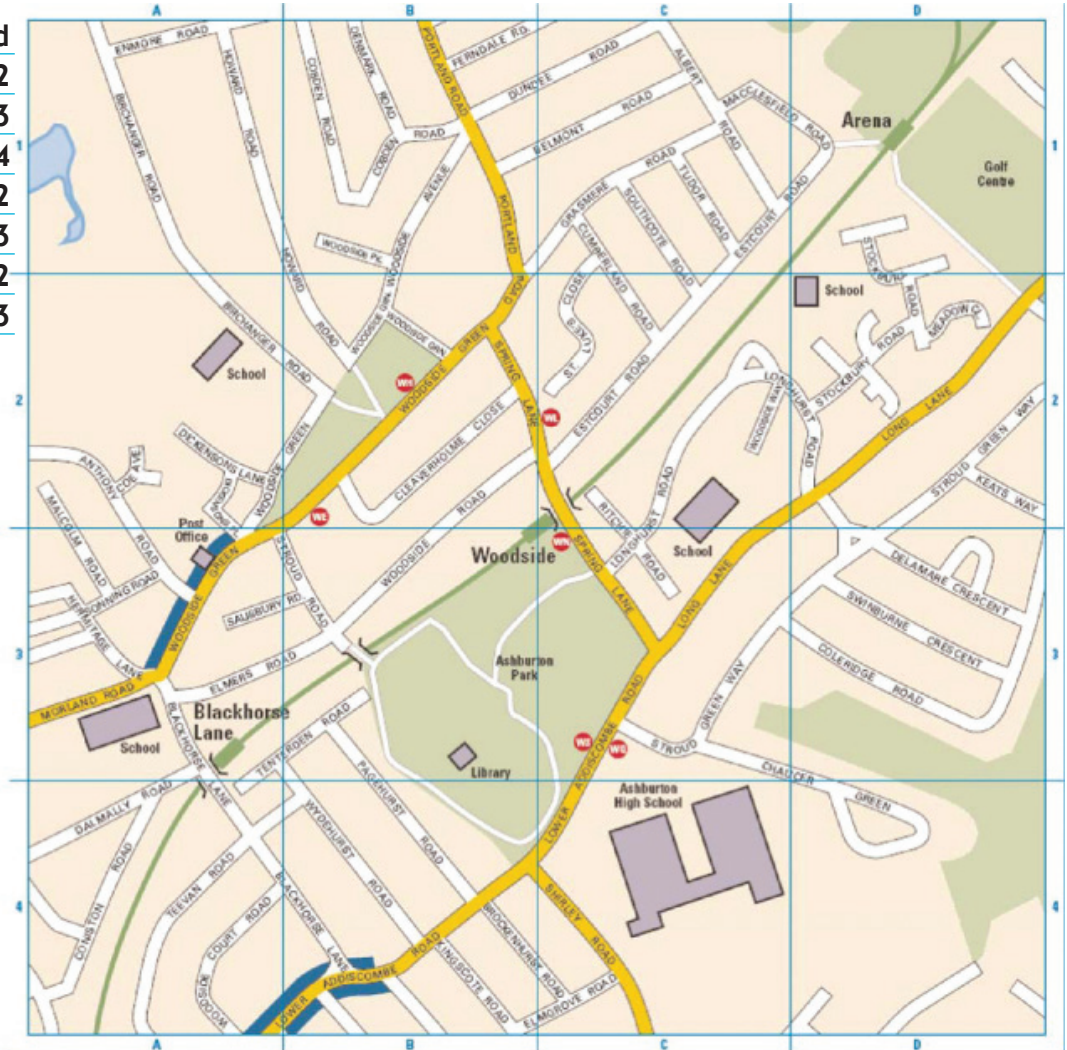
Which number bus or buses travel to the following destinations?

- 1. Beckenham .....
- 2. East Croydon.....

# Planning a journey

## Using a tram map

Street name	grid
Meadow Close	D2
Moorland Road	A3
Pagehurst Road	B3-B4
Portland Road	B1-B2
Ritchie Road	C2-C3
St Luke's Close	C2
Salisbury Road	A3



### Map key

Tramlink line and stop	
National Rail line and station	
Road served by buses	
Other roads	
Local bus stop	
Shopping area	

### Index to nearby places

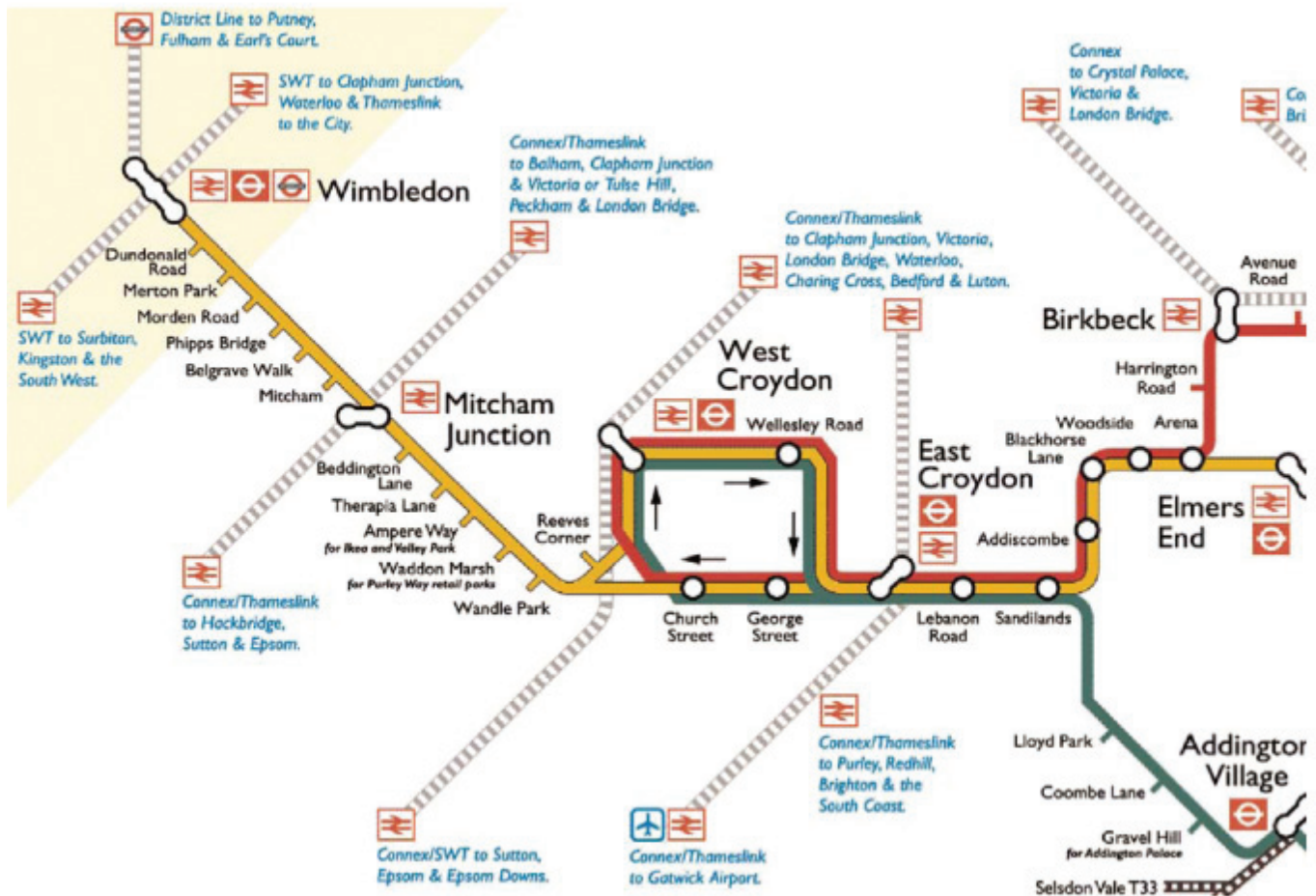
Place	map grid
Ashburton High School	C4
Ashburton Park	B3
Golf Course	D1
Library	B3
Post Office	A3

### Destinations by bus






Towards	Route number	Bus stop letter
Addington Village	130	MC MC
Beckenham	726	MC
Bromley	726	MC
Carshalton	726	MC
Cheam	726	MC
Dulwich	312	MC MC
East Croydon	197	MC
	312	MC MC
Elmers End	289	MC
	726	MC
Feltham	726	MC
Forest Hill	312	MC MC
Gravel Hill	130	MC MC

# Planning a journey

## Using a tram map



### Map key

-  **Tramlink Route 1:** Wimbledon - Elmers End, every 10 minutes during the day
-  **Tramlink Route 2:** Croydon - Beckenham Junction, every 10 minutes during the day
-  **Tramlink Route 3:** Croydon - New Addington, every 6-7 minutes during the day
-  Connecting rail services
-  Connecting bus services

### Use the tram at Wimbledon?

All under 16s, including those aged 5-13, travelling on the tram to/from Wimbledon will need an Oyster Child photocard to benefit from free travel.

